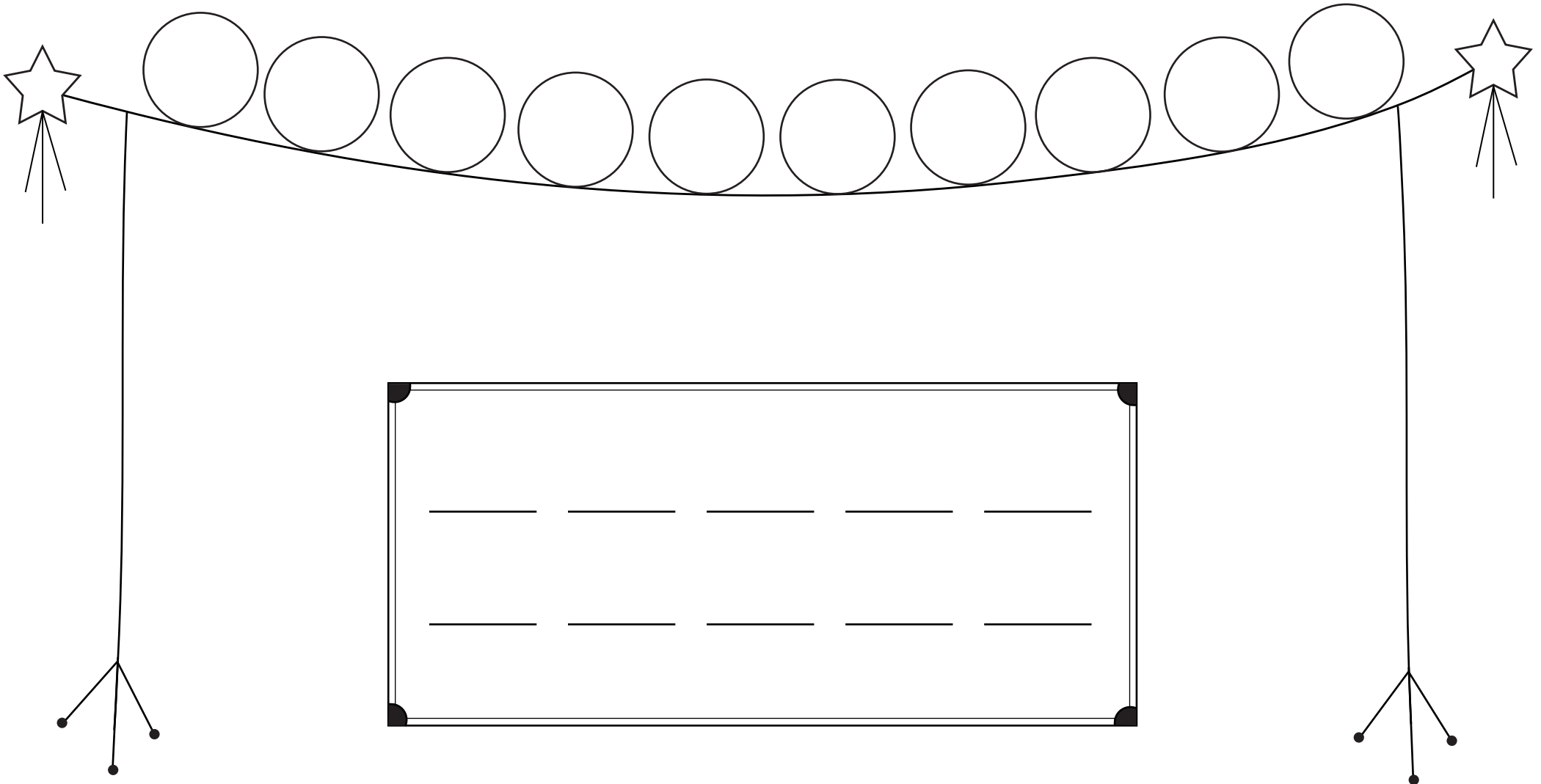



I

Aseta luvut järjestykseen.



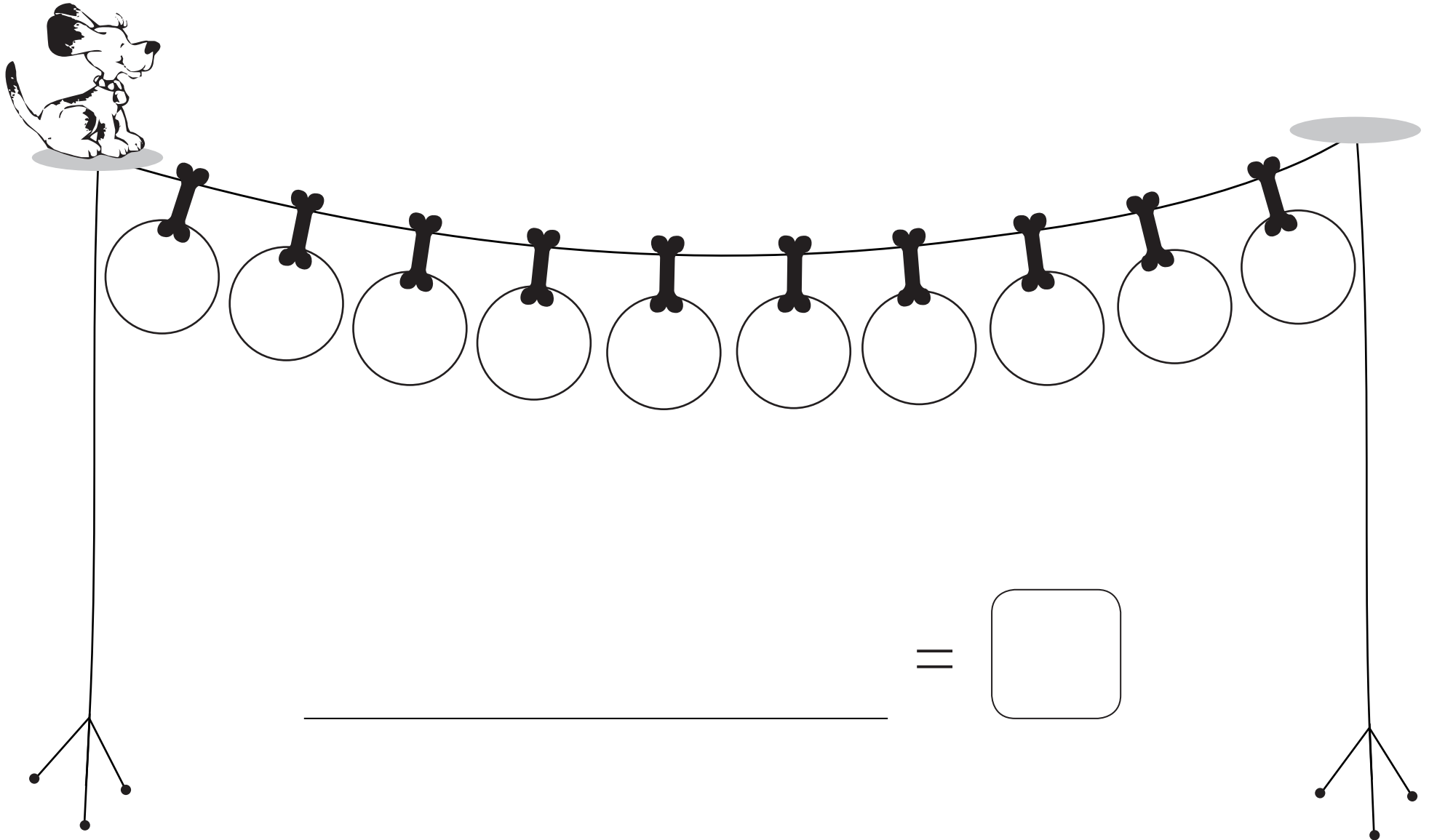
**3**

Laske Pave Pellen sormikkailla.

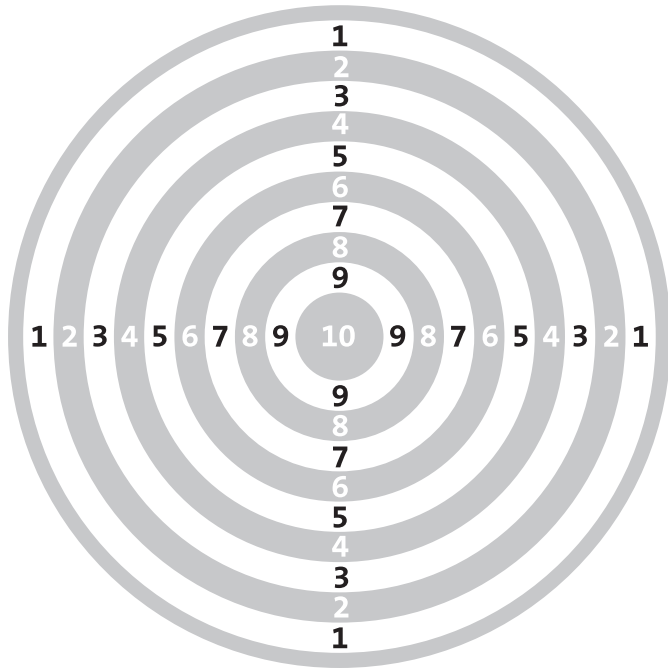


4

Laske Turren loikat.



## Keksi tikkojen osumat.



$$\begin{array}{c} \text{Dart} \\ \square \end{array} + \begin{array}{c} \text{Dart} \\ \square \end{array} = 10$$

$$\begin{array}{c} \text{Dart} \\ \square \end{array} + \begin{array}{c} \text{Dart} \\ \square \end{array} + \begin{array}{c} \text{Dart} \\ \square \end{array} = 10$$

$$\begin{array}{c} \text{Dart} \\ \square \end{array} + \begin{array}{c} \text{Dart} \\ \square \end{array} + \begin{array}{c} \text{Dart} \\ \square \end{array} + \begin{array}{c} \text{Dart} \\ \square \end{array} = 10$$

$$\begin{array}{c} \text{Dart} \\ \square \end{array} + \begin{array}{c} \text{Dart} \\ \square \end{array} + \begin{array}{c} \text{Dart} \\ \square \end{array} + \begin{array}{c} \text{Dart} \\ \square \end{array} + \begin{array}{c} \text{Dart} \\ \square \end{array} = 10$$



## Joko osaat?



Mikä tulee ruutuun?

Yhdistä pisteet tehtävien järjestyksessä.

a.  $2 + 7 = \square$

b.  $0 + 8 = \square$

c.  $8 - 2 = \square$

d.  $9 - 7 = \square$

e.  $4 - \square = 3$

f.  $\square - 3 = 2$

g.  $\square + 4 = 7$

h.  $\square - 5 = 5$

i.  $7 \square 2 = 9$

j.  $6 \square 5 = 1$

9  
•  
•  
-

•  
+

8

6

1

5

2

3

•  
10
